


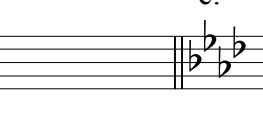



Assignment 4.1






Name: _____

1. Name both the *major* and *minor* key for each signature. Use uppercase for major and lowercase for minor. (10 pts.)

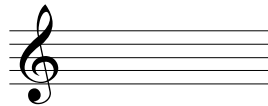
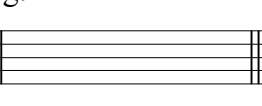
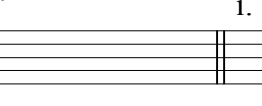
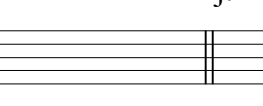
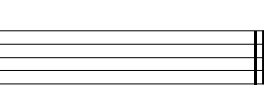
a.  b.  c.  d.  e. 

M: _____ M: _____ M: _____ M: _____ M: _____
 m: _____ m: _____ m: _____ m: _____ m: _____

2. Write the correct key signature for each *minor* key: (20 pts.)






a.  b.  c.  d.  e. 

d c a# eb c#






f.  g.  h.  i.  j. 




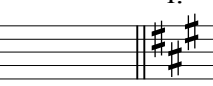

f b f# ab g#

3. Based on the *key signature* and *tonic pitch*, name the correct key. Use uppercase for major and lowercase for minor. (10 pts.)

a.  b.  c.  d.  e. 

4. Indicate the *name of the scale degree* for the given note in each *minor* key. (10 pts.)


a.  b.  c.  d.  e. 

f.  g.  h.  i.  j. 

Introduction to Music Theory/Assignment 4.1


5. Write key signatures and ascending scales as indicated. Give the name of the scale you write. (28 pts.)

a. c minor's relative major




Name of scale: _____

b. B major's parallel minor (harmonic)




Name of scale: _____

c. B major's relative minor (natural)




Name of scale: _____

d. A^b minor's parallel major




Name of scale: _____

e. F major's relative minor (melodic)




Name of scale: _____

f. C[#] major's parallel minor (harmonic)



Name of scale: _____

g. E^b major's relative minor (melodic)



Name of scale: _____

Introduction to Music Theory/Assignment 4.1

6. What is the difference between a leading tone and a subtonic? In what scales do you find each? (4 pts.)

7. Given the pitch and minor-scale degree, write the specified scale (ascending only). (8 pts.)

a. melodic minor

b. natural minor

c. harmonic minor

d. melodic minor

8. Given the minor key and scale degree, write the specified pitch. (10 pts.)

a.	b.	c.	d.	e.
e: $\hat{3}$ (natural)	f: $\hat{7}$ (harmonic)	b \flat : $\hat{4}$ (melodic ascending)	c: $\hat{6}$ (natural)	d \sharp : $\hat{5}$ (melodic ascending)
f.	g.	h.	i.	j.
c \sharp : $\hat{7}$ (harmonic)	d: $\hat{5}$ (natural)	g \sharp : $\hat{7}$ (melodic ascending)	b: $\hat{5}$ (natural)	a \flat : $\hat{6}$ (harmonic)