


Practice Drill:


Write major scales with key signatures

1. Write the key signatures and and the ascending scales for the following major keys:


sample




A musical staff in treble clef showing an ascending scale from C to A. The notes are C, D, E, F, G, A. The word "sample" is written above the staff. The letter "C" is written below the first note, and the letter "A" is written below the last note.




A musical staff in treble clef with a key signature of one flat (D-flat) and a G. The staff is empty, with "D^b" written below the first line and "G" written below the second line.




A musical staff in treble clef with a key signature of one sharp (D) and a C-flat. The staff is empty, with "D" written below the first line and "C^b" written below the second line.



A musical staff in bass clef with a key signature of one flat (F) and an E. The staff is empty, with "F" written below the first line and "E" written below the second line.



A musical staff in bass clef with a key signature of two flats (E-flat) and an F-sharp. The staff is empty, with "E^b" written below the first line and "F[#]" written below the second line.



A musical staff in bass clef with a key signature of two flats (G-flat) and a C-sharp. The staff is empty, with "G^b" written below the first line and "C[#]" written below the second line.